






# Fur, Feathers and Scales

Here are some animals you may have seen in the zoo. Are they Birds, Reptiles or Mammals?

Decide which group they belong to, then count them and add them up!

| Animal   |  | Mammal<br>Reptile<br>Or Bird? | How<br>Many? |
|----------|--|-------------------------------|--------------|
| ZEBRA    |    |                               |              |
| TORTOISE |    |                               |              |
| OWL      |    |                               |              |
| TIGER    |   |                               |              |
| SNAKE    |  |                               |              |

Fill in the boxes for how many of each animal.

How many mammals are there altogether?

\_\_\_\_\_

How many reptiles?

\_\_\_\_\_

How Many Birds?

\_\_\_\_\_

How many animals altogether?

\_\_\_\_\_